

**Entry 2: Read and record time in common date formats, and read time displayed in analogue clocks in hours, half hours, and quarter hours, and understand hours from a 24-hour digital clock**

- 1.** Sumra was born on 19.10.1980.


Which month was Sumra born in?.....

Which year was Sumra born in?.....


- 2.** Write today's date in three common date formats.

..... , ..... , .....

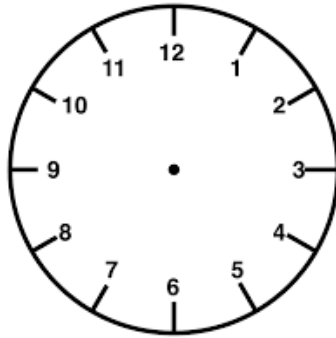
- 3.** Write underneath each clock face, the time shown.



- 4.** Write underneath each clock face, the time shown.



5. Show 'quarter past 9' in the clock face below.



6. Zen writes the 2<sup>nd</sup> April 2020 as : **04.02.2020**

Is he correct? Explain your answer.

.....

7. Zen also thinks that the clock face below shows the time 'quarter to 10'. Is he right? Why?



.....